

Thakur Educational Trust's (Regd.)
THAKUR VIDYA MANDIR HIGH SCHOOL & JUNIOR COLLEGE
II Term Exam Paper 2015-16
Subject : English

Name : _____ Std: I Div : _____ Roll No. _____

DATE - 19.01.2016

Marks : 60

Q. I. A] Fill in the blanks by choosing the correct words from the bracket:- (4)

(Grandma, scarf, bell, ten)

- 1) She left her _____ in the bus.
- 2) There are _____ animals in the picture.
- 3) There was a small _____ on the bicycle.
- 4) _____ gave Priya one sweet at a time.

B] Match the columns :

(5)

Column A

Column B

- | | |
|------------------|------------|
| 1) sweets | a) balloon |
| 2) colourful | b) jar |
| 3) doggie | c) road |
| 4) traffic rules | d) doctor |

C] Make sentences :

(4)

1) week - _____

2) basket - _____

Q. II A] Write true or false :

(5)

- 1) Sania's bicycle was blue in colour. _____
- 2) Rohan put medicine on the doggie's paw. _____
- 3) Munnu did not like to eat potatoes . _____
- 4) We should use the zebra crossing to cross the road. _____

B] Circle the correct word :

(3)

- 1) The girl left the money at school / home.
- 2) The little red hen found few grains of wheat / rice.
- 3) Priya / Sania liked sweets.

C] Complete the following sentences :

(3)

1) They saw the peacock _____

2) A little red hen lived _____

3) Grandma has cleaned _____

Q. III Do as directed :

1) Give opposites : (2)

a) well x _____

b) buy x _____

2) Give Rhyming words : (2)

a) paw - _____

b) toy - _____

3) Find the smaller word in : (2)

a) bring - _____

b) peacock - _____

4) Complete the given word : (2)

a) h ___ m ___

b) s ___ l ___ d

5) Make a new word by adding a letter to the given word : (2)

a) all - _____

b) we - _____

Q. IV A] Who said to whom ? (4)

1) " Ninety – five rupees in all."

Ans: _____

2) " Let us go to the garage."

Ans: _____

B] Answer the following questions : (6)

1) Who is sleeping in cave ?

Ans: _____

2) Why did the Rohan and Saniya go to the garage ?

Ans: _____

3) What did Rohan and Sania finally buy ?


Ans: _____

Grammar

QI Do as directed:

1. Write the missing vowels :

(1)



m _ _ n g _ _

2. Fill in the blanks with 'a' or 'an':

(1)

There is _____ bird in the nest.

3. Write the correct gender :


cock and _____ [hen, peahen]

4. Write a word in the blank to show many :

dog - _____

5. Write 'He', 'she' or 'it' :

a) _____ is a teacher.



6. Circle the odd man out :

bus, house, car, train

7. Write the given sentence using capital letter and a full stop :

mary had a little lamb

Ans: _____

8. Circle the 'doing word'


I drink a glass of milk every day.

9. Write 'am' 'is' or 'are'

The girl _____ lazy .


10. Fill in the blanks with 'This' or 'That'

_____ is a tree



11. Fill in the blanks with 'These' or 'Those'

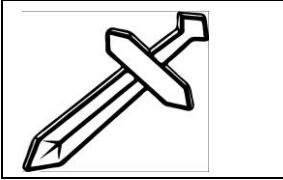

_____ are apples



12. Underline the describing word :

The log is heavy.

13. Rewrite the word using 'and' :


	
sword	shield

Ans: _____

14. Fill in the blank with the correct word :

The boy is _____ the tree (in/ under)

15. Choose and write the correct name of the tool :



sweeper - _____ [broom, saw]

QII] Write five sentences on 'festivals' or 'Teacher's day'

1. _____

2. _____

3. _____

4. _____

5. _____

All the best

Thakur Educational Trust's (Regd.)
THAKUR VIDYA MANDIR HIGH SCHOOL & JUNIOR COLLEGE

II Terminal Examination 2015-16

Subject : Mathematics

NAME _____ Std: I DIV. _____

Roll NO.: _____ DATE - 21/01/2016 MARKS: 60

QI A] Write in words : (4)

a) 45 - _____

b) 93 - _____

c) 27 - _____

d) 34 - _____

B] Write in numerals: (4)

1. Twenty three - _____

2. Sixty seven - _____

3. Fifty nine - _____

4. Ninety eight - _____

C] Fill in the boxes : (4)

a) $1 \times 3 =$

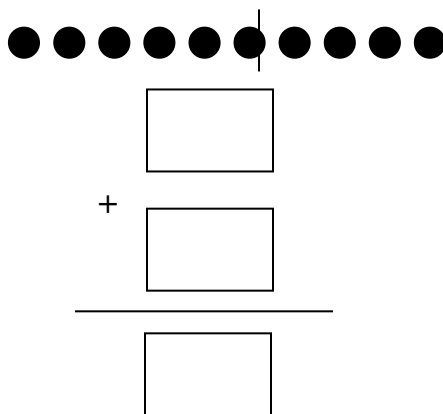
b) $2 \times 7 =$

c) $3 \times 9 =$


d) $4 \times 8 =$

Q.II Do as directed : (3)

1) Count the beads in both the parts. Write the numbers in the boxes and complete the addition.




2) Which coins will you use to make the given amount? (2)



3) a) Cross (x) the one that is tallest. Tick (✓) the one that is shortest :

(2)



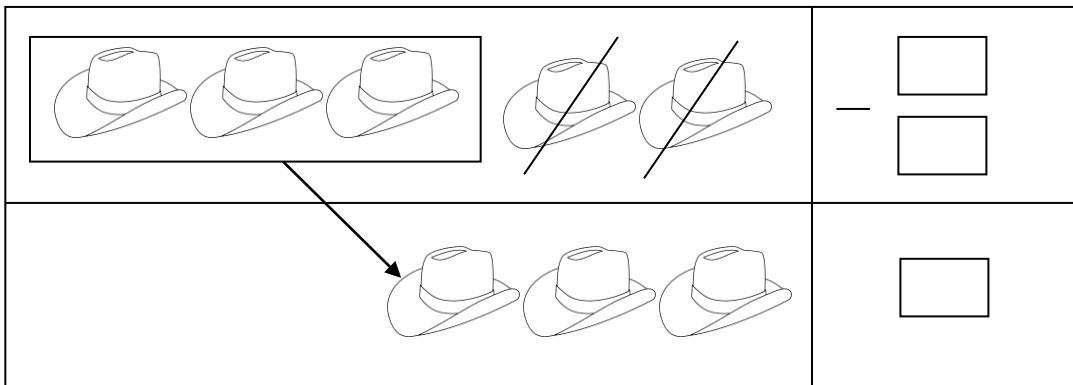
b) Tick (✓) the one that is lighter. Cross (x) the one that is heavier :

(2)



4) Write the total number of objects, struck off objects and left out objects in the boxes :

(3)



5) Write the correct number in each box and find the answer :

(3)


Roshni had three balls.

She gave one to Amit. —


How many are left with her ?

QIII Do as directed :

1) Write the missing numbers :



- 2) **Make group of ten objects and write the number:**
(2)



- 3) **Find the sum by counting forward on a number strip :**
(2)

$$4 + 1 = \boxed{}$$

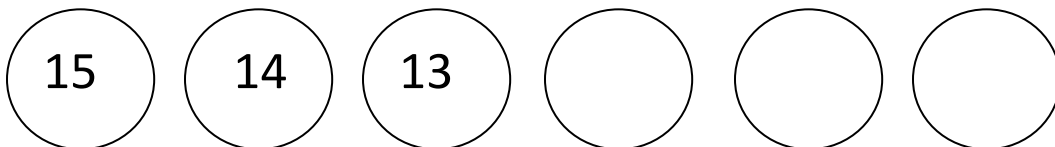
- 4) **Add the following :**
(2)

$$\begin{array}{r} \text{a) } 8 \\ + 9 \\ \hline \end{array}$$

$$\begin{array}{r} \text{b) } 10 \\ + 5 \\ \hline \end{array}$$

Q IV Do as directed :

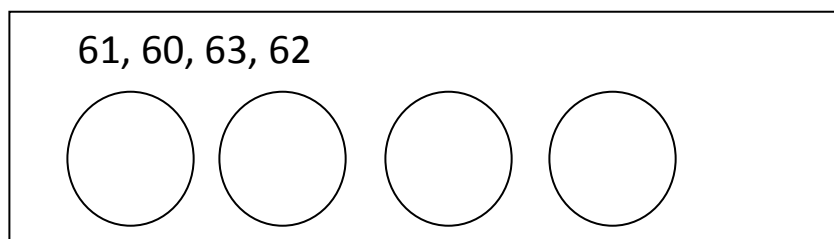
- 1) **Recognize the pattern and write the correct numbers in the empty circles :** (3)



- 2) **Write the correct number in the box :** (4)

a) 2 tens 3 units b) 5 tens 6 units

- 3) **Arrange the numbers in serial order :**



- 4) **Write the number that comes before & after the given number :** (2)




	63	
--	----	--

QV Do as directed :




- 1) The digits of the following numbers are inter changed.
Write the tens and units of the two numbers so formed : (4)**

		84		
	84	8	48	
		4		
<input type="text"/>	T	<input type="text"/>	U	<input type="text"/>
				<input type="text"/>
				T
				<input type="text"/>
				U

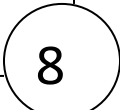
- 2) Count the objects and write the correct number in each box.
Choose and write the smaller number in the circle : (3)**

	<input type="text"/>	
	<input type="text"/>	

- 3) Count the objects and write the correct number in each box (3)**

	+	<input type="text"/>
		<input type="text"/>
		<input type="text"/>

- 4) Write the correct number in each box so that the sum of the numbers is equal to the number at the centre : (2)**

	3 +	<input type="text"/>	
1 +	<input type="text"/>	—	

All the best